

FRAZIONI COMPLEMENTARI

ESERCIZI

indica la frazione complementare:

$$\frac{3}{6} + \text{---} = \text{---}$$

$$\frac{2}{18} + \text{---} = \text{---}$$

$$\frac{17}{64} + \text{---} = \text{---}$$

$$\frac{8}{12} + \text{---} = \text{---}$$

$$\frac{7}{10} + \text{---} = \text{---}$$

$$\frac{9}{31} + \text{---} = \text{---}$$

$$\frac{5}{15} + \text{---} = \text{---}$$

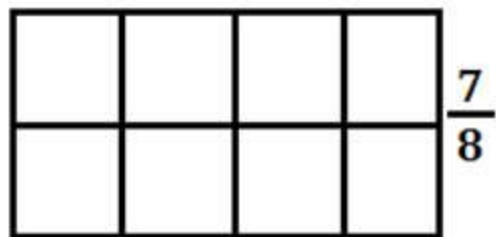
$$\frac{13}{17} + \text{---} = \text{---}$$

$$\frac{19}{71} + \text{---} = \text{---}$$

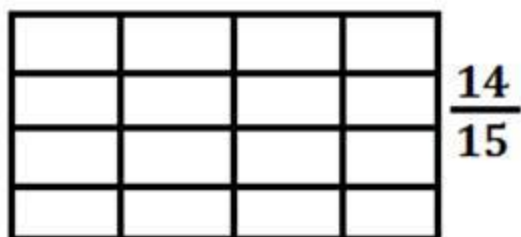
$$\frac{7}{21} + \text{---} = \text{---}$$

$$\frac{11}{24} + \text{---} = \text{---}$$

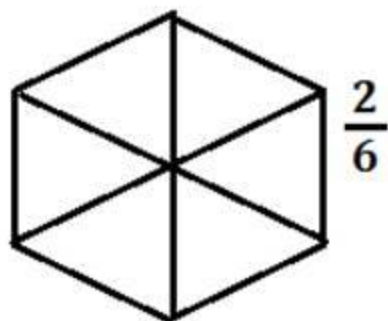
$$\frac{38}{57} + \text{---} = \text{---}$$



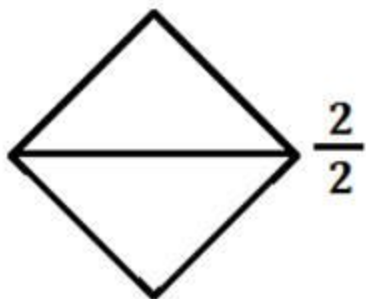
$$\frac{7}{8}$$



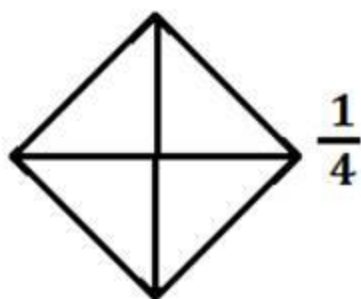
$$\frac{14}{15}$$



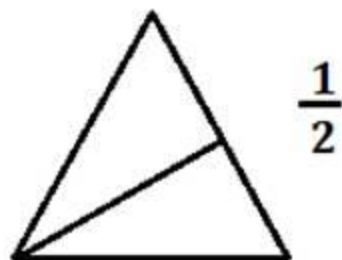
$$\frac{2}{6}$$



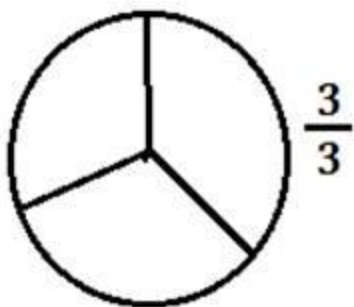
$$\frac{2}{2}$$



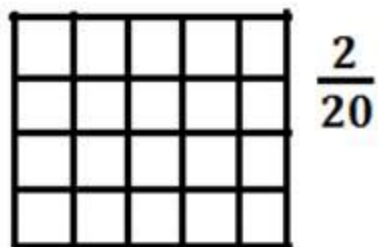
$$\frac{1}{4}$$



$$\frac{1}{2}$$



$$\frac{3}{3}$$



$$\frac{2}{20}$$

